

Date: \_\_\_\_\_

---

## Grade 7: Math

### 2.3 Integers- Number Patterns

---

- Describe the following number patterns and write the next 2 terms and the 10th term.

1. 2, 4, 6, 8, \_\_\_\_\_, \_\_\_\_\_.

Begin: \_\_\_\_\_

\_\_\_\_\_

2. 1, 3, 5, 7, \_\_\_\_\_, \_\_\_\_\_.

Begin: \_\_\_\_\_

\_\_\_\_\_

3. 2, 3, 5, 8, \_\_\_\_\_, \_\_\_\_\_.

Begin: \_\_\_\_\_

\_\_\_\_\_

4. 15, 20, 25, 30, \_\_\_\_\_, \_\_\_\_\_.

Begin: \_\_\_\_\_

\_\_\_\_\_

5. -2, 4, -8, 16, \_\_\_\_\_, \_\_\_\_\_.

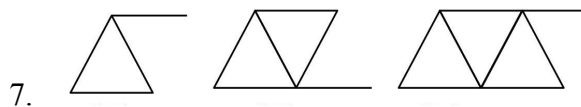
Begin: \_\_\_\_\_

\_\_\_\_\_

6. 2, 5, 11, 20, 32, 47 \_\_\_\_\_, \_\_\_\_\_.

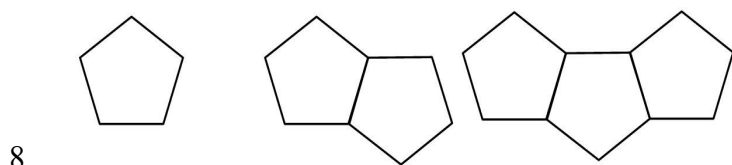
Begin: \_\_\_\_\_

\_\_\_\_\_



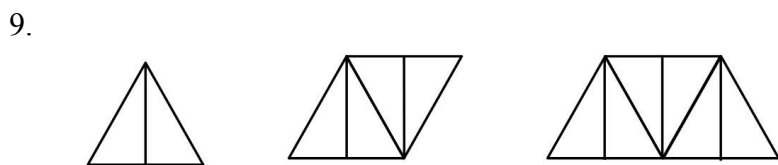
Begin: \_\_\_\_\_

---



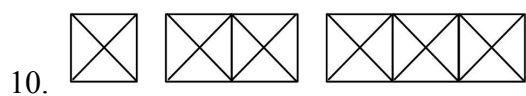
Begin: \_\_\_\_\_

---



Begin: \_\_\_\_\_

---



Begin: \_\_\_\_\_

---

- Homework: Page 371 #1-10 from textbook and complete this handout.